
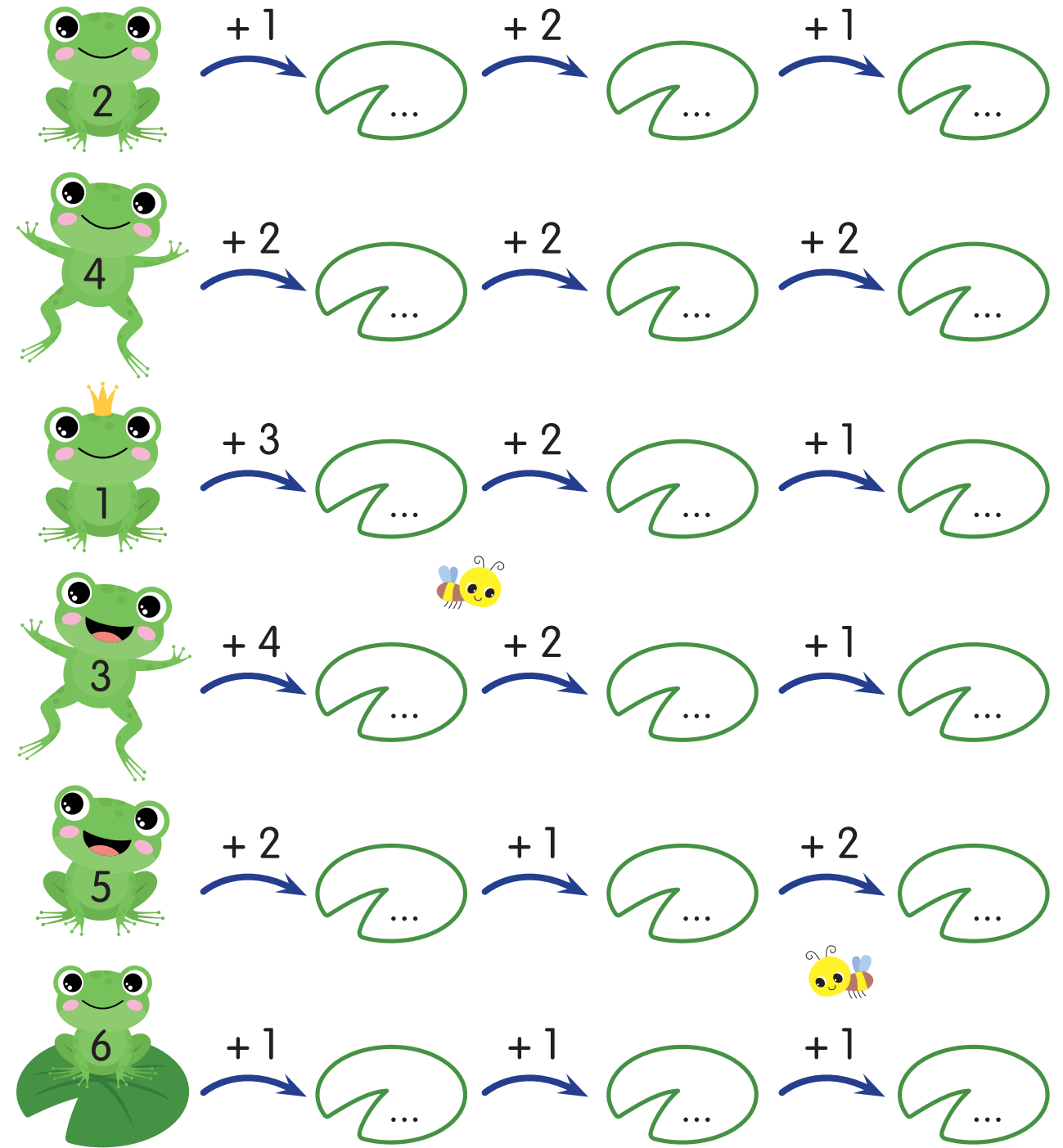
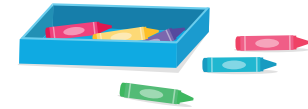


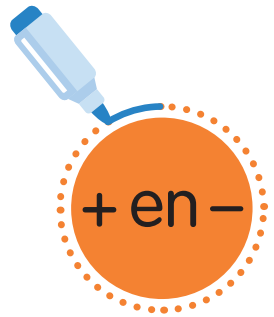


Rekenen maar! Verbind elke potlood met het juiste kind.




Laat de kikkers springen en schrijf de juiste getallen op de stipjes.






Tel eerst de figuren in elk vak. Omcirkel dan de bewerking die het juiste aantal geeft.




$5 + 6$ $13 - 6$ $7 + 8$



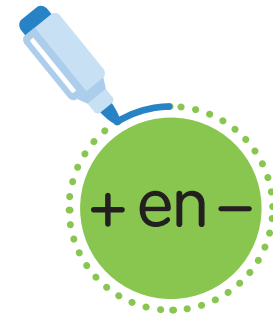
$4 + 11$ $20 - 3$ $7 + 5$



$17 - 10$ $6 + 3$ $18 - 7$



$5 + 4$ $13 - 7$ $15 - 7$



Kan jij ook omgekeerde sommen maken? Vul de juiste cijfers in op de stipjes.



$20 - \dots = 8$
 $8 + \dots = 14$
 $12 - \dots = 5$
 $3 + \dots = 9$
 $17 - \dots = 11$

$16 + \dots = 20$
 $11 - \dots = 2$
 $5 + \dots = 10$
 $7 - \dots = 5$
 $6 + \dots = 11$



$4 + \dots = 16$
 $18 - \dots = 7$
 $5 + \dots = 12$
 $19 - \dots = 6$
 $2 + \dots = 20$

$15 - \dots = 11$
 $13 + \dots = 17$
 $14 - \dots = 6$
 $9 + \dots = 18$
 $8 - \dots = 3$

