

de tafel van...

1



$$1 \times 1 = \dots$$

$$2 \times 1 = \dots$$

$$3 \times 1 = \dots$$

$$4 \times 1 = \dots$$

$$5 \times 1 = \dots$$

$$6 \times 1 = \dots$$

$$7 \times 1 = \dots$$

$$8 \times 1 = \dots$$

$$9 \times 1 = \dots$$

$$10 \times 1 = \dots$$

Los snel op!

$$6 \times 1 = \dots$$

$$9 \times 1 = \dots$$

$$2 \times 1 = \dots$$

$$4 \times 1 = \dots$$

$$10 \times 1 = \dots$$

$$8 \times 1 = \dots$$

$$7 \times 1 = \dots$$

$$1 \times 1 = \dots$$



Verbind de vermenigvuldiging met de eentjes die erbij horen.



$7 \times 1 \cdot$	$\cdot 1$
$3 \times 1 \cdot$	$\cdot 1 + 1$
$8 \times 1 \cdot$	$\cdot 1 + 1 + 1$
$4 \times 1 \cdot$	$\cdot 1 + 1 + 1 + 1$
$5 \times 1 \cdot$	$\cdot 1 + 1 + 1 + 1 + 1$
$2 \times 1 \cdot$	$\cdot 1 + 1 + 1 + 1 + 1 + 1$
$1 \times 1 \cdot$	$\cdot 1 + 1 + 1 + 1 + 1 + 1 + 1$
$6 \times 1 \cdot$	$\cdot 1 + 1 + 1 + 1 + 1 + 1 + 1 + 1$

Alles door elkaar! Laat zien wat je kunt!

$1 \times 1 = \dots$

$3 \times 1 = \dots$

$1 \times 8 = \dots$

$2 \times 1 = \dots$

$1 \times 6 = \dots$

$1 \times 7 = \dots$

$1 \times 5 = \dots$

$4 \times 1 = \dots$

$1 \times 3 = \dots$

$10 \times 1 = \dots$

$9 \times 1 = \dots$

$6 \times 1 = \dots$



de tafel van...

2



$1 \times 2 = \dots$

$2 \times 2 = \dots$

$3 \times 2 = \dots$

$4 \times 2 = \dots$

$5 \times 2 = \dots$

$6 \times 2 = \dots$

$7 \times 2 = \dots$

$8 \times 2 = \dots$

$9 \times 2 = \dots$

$10 \times 2 = \dots$

Los snel op!

$\dots \times 2 = 4$

$\dots \times 2 = 6$

$\dots \times 2 = 8$

$\dots \times 2 = 10$

$\dots \times 2 = 12$

$\dots \times 2 = 14$

En nu wat moeilijker!

$5 \times 2 = \dots$

$2 \times 2 = \dots$

$7 \times 2 = \dots$

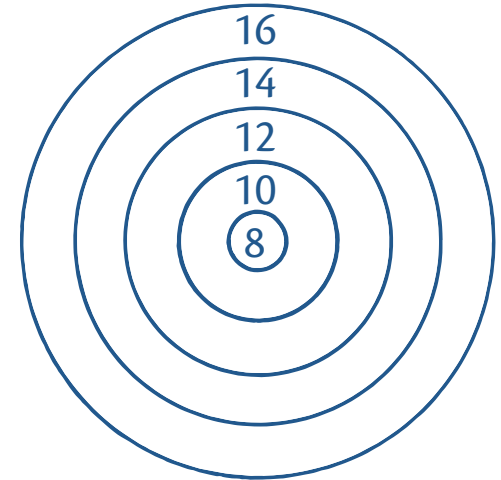
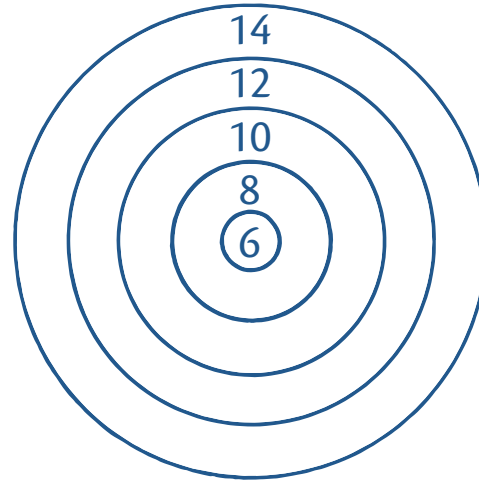
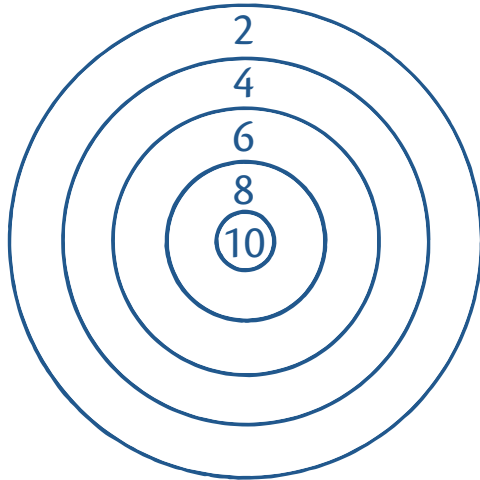
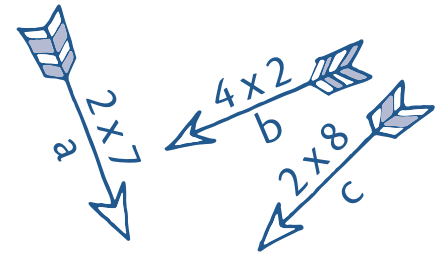
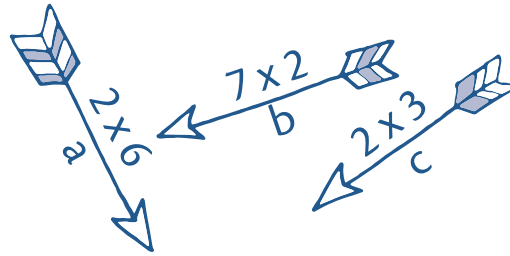
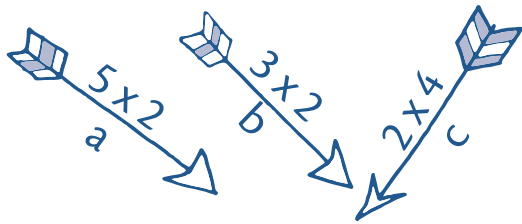
$4 \times 2 = \dots$

$6 \times 2 = \dots$

$3 \times 2 = \dots$

$9 \times 2 = \dots$

Schrijf de letter die bij elke pijl staat op de juiste plaats in de schietschijf.



de tafel van...

3



$1 \times 3 = \dots$

$2 \times 3 = \dots$

$3 \times 3 = \dots$

$4 \times 3 = \dots$

$5 \times 3 = \dots$

$6 \times 3 = \dots$

$7 \times 3 = \dots$

$8 \times 3 = \dots$

$9 \times 3 = \dots$

$10 \times 3 = \dots$

Oefenen maar!



$\dots \times 3 = 9$

$6 \times \dots = 18$

$\dots \times 10 = 30$

$3 \times 4 = \dots$

$5 \times \dots = 15$

$\dots \times 3 = 21$

$\dots \times 3 = 6$

$3 \times 8 = \dots$

$3 \times \dots = 3$

$3 \times 9 = \dots$

Een vluggertje!

$$5 \times 3 = \dots$$

$$10 \times 3 = \dots$$

$$8 \times 3 = \dots$$

$$3 \times 3 = \dots$$

$$2 \times 3 = \dots$$

$$7 \times 3 = \dots$$

$$1 \times 3 = \dots$$

$$4 \times 3 = \dots$$

$$9 \times 3 = \dots$$

Aan het werk!

$$3 \times \dots = 9$$

$$3 \times \dots = 24$$

$$3 \times \dots = 6$$

$$3 \times \dots = 27$$

$$3 \times \dots = 12$$

$$3 \times \dots = 15$$

$$3 \times \dots = 3$$

$$3 \times \dots = 18$$

$$3 \times \dots = 21$$

Dit gaat al snel!

$$9 \times \dots = 27$$

$$2 \times 3 = \dots$$

$$\dots \times 3 = 24$$

$$\dots \times 3 = 12$$

$$10 \times 3 = \dots$$

$$3 \times \dots = 9$$

$$6 \times \dots = 18$$

$$\dots \times 3 = 21$$

$$5 \times 3 = \dots$$

Vul de ontbrekende getallen in.

$$\dots \times 5 = 15$$

$$3 \times \dots = 12$$

$$3 \times 8 = \dots$$

$$9 \times \dots = 27$$

$$3 \times \dots = 30$$

$$\dots \times 1 = 3$$

$$3 \times \dots = 18$$

$$7 \times 3 = \dots$$



de tafel van...

4



$$1 \times 4 = \dots$$

$$2 \times 4 = \dots$$

$$3 \times 4 = \dots$$

$$4 \times 4 = \dots$$

$$5 \times 4 = \dots$$


$$6 \times 4 = \dots$$

$$7 \times 4 = \dots$$

$$8 \times 4 = \dots$$

$$9 \times 4 = \dots$$

$$10 \times 4 = \dots$$



En nu door elkaar!

$$3 \times 4 = \dots$$

$$7 \times 4 = \dots$$

$$8 \times 4 = \dots$$

$$2 \times 4 = \dots$$

$$5 \times 4 = \dots$$

$$6 \times 4 = \dots$$

$$1 \times 4 = \dots$$

$$4 \times 4 = \dots$$

$$9 \times 4 = \dots$$

Aan het werk!

$6 \times 4 = \dots$

$\dots \times 4 = 4$

$9 \times 4 = \dots$

$\dots \times 4 = 16$

$7 \times 4 = \dots$

$10 \times 4 = \dots$

$\dots \times 4 = 8$

$3 \times 4 = \dots$

$\dots \times 4 = 20$

$8 \times 4 = \dots$

Dit gaat vast al goed!

$\dots \times 4 = 16$

$\dots \times 4 = 28$

$\dots \times 4 = 32$

$\dots \times 4 = 40$

$\dots \times 4 = 4$

$\dots \times 4 = 36$

$\dots \times 4 = 24$

$\dots \times 4 = 12$

$\dots \times 4 = 20$

$\dots \times 4 = 8$

Vul in net als het voorbeeld!

$3 \times 4 = 4 \times 3 = \dots$

$6 \times 4 = \dots \times \dots = \dots$

$4 \times 5 = \dots \times \dots = \dots$

$4 \times 8 = \dots \times \dots = \dots$

$7 \times 4 = \dots \times \dots = \dots$

$4 \times 9 = \dots \times \dots = \dots$

$2 \times 4 = \dots \times \dots = \dots$

$4 \times 1 = \dots \times \dots = \dots$

